

Georgia
CRCT
online



Math-Geometry and Measurement Quiz 4

Fourth Grade Mathematics
Test

Jill Tonelli

Name: _____

Date: _____

Instructions:

Name: _____

Test: Math-Geometry and Measu

Date: _____





Teacher: Jill Tonelli

1. What are these lines to each other?



- A. congruent
 - B. parallel
 - C. symmetrical
 - D. perpendicular
-

2. Which is a triangle?

- A. 
 - B. 
 - C. 
 - D. 
-

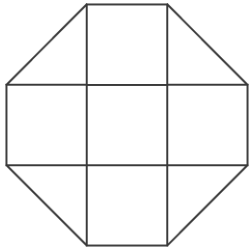
Name: _____

Test: Math-Geometry and Measu

Date: _____

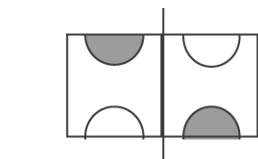
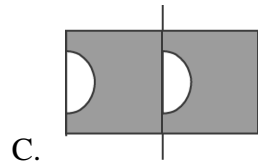
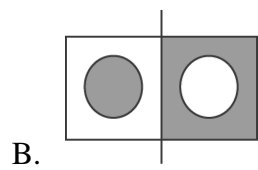
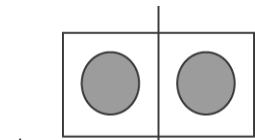
Teacher: Jill Tonelli

3. Each square is 1 sq cm. What is the area of the figure?



- A. 5 sq cm
 - B. 6 sq cm
 - C. 7 sq cm
 - D. 8 sq cm
-

4. Which of the following pictures is symmetrical with respect to the line dividing it?



D.

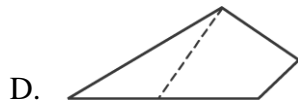
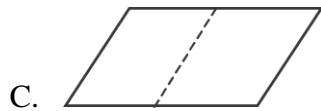
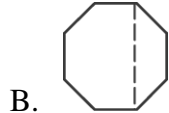
Name: _____

Test: Math-Geometry and Measu

Date: _____

Teacher: Jill Tonelli

5. Which shape can be folded along the dotted line so that both sides will match exactly?



6. Solve.

$$\begin{array}{r} \$9.90 \\ + \$4.85 \\ \hline \end{array}$$

- A. \$13.75
- B. \$13.85
- C. \$14.75
- D. \$14.85

7. Which unit is used to measure the weight of a desk?

- A. feet
 - B. inches
 - C. pounds
 - D. tons
-

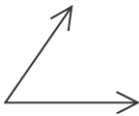



Name: _____

Test: Math-Geometry and Measu

Date: _____

Teacher: Jill Tonelli

8. Which of the pictures shows a ray?

- A. 
 - B. 
 - C. 
 - D. 
-

9. Which object could be 2 meters long?

- A. car
 - B. crayon
 - C. book
 - D. table
-

10. Travis is making a vegetable garden. One side is 4 feet long and the other side is 9 feet long. What is the area of his rectangular vegetable garden?

- A. 16 sq. ft.
 - B. 26 sq. ft.
 - C. 32 sq. ft.
 - D. 36 sq. ft.
-

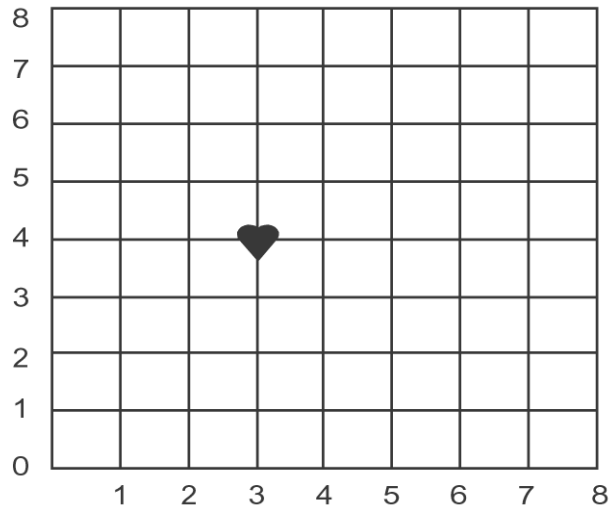
Name: _____

Test: Math-Geometry and Measu

Date: _____





Teacher: Jill Tonelli

11. Which is the location of the heart?



- A. (4, 4)
 - B. (3, 3)
 - C. (4, 3)
 - D. (3, 4)
-

12. Which shape does NOT have any parallel sides?

- A. 
 - B. 
 - C. 
 - D. 
-

Name: _____

Test: Math-Geometry and Measu

Date: _____

Teacher: Jill Tonelli

13. Nathaniel practiced his drums for 55 minutes on Monday, 48 minutes on Tuesday, and 1 hour and 10 minutes on Thursday. How long did he practice his drums altogether?

- A. 2 hours and 53 minutes
 - B. 2 hours and 13 minutes
 - C. 1 hour and 53 minutes
 - D. 1 hour and 13 minutes
-

14. Lucia wanted to buy a chicken sandwich for \$1.40. She has 3 quarters, 4 dimes, and 1 nickel. How much more money does Lucia need?

15. If Kendra begins her paper route at 4:00 P.M. and is done at 5:15 P.M., how much time does she need to complete her route?

- A. 15 minutes
 - B. 45 minutes
 - C. 1 hour 15 minutes
 - D. 1 hour 45 minutes
-

16. Which object would you weigh in grams?

- A. a grape
 - B. a bag of flour
 - C. a person
 - D. a truck
-

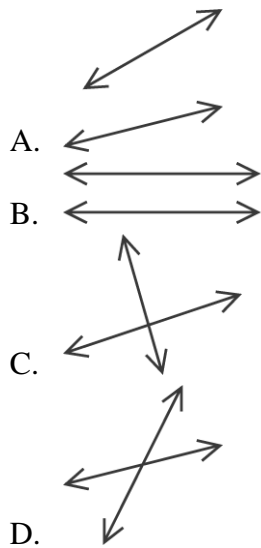
Name: _____

Test: Math-Geometry and Measu

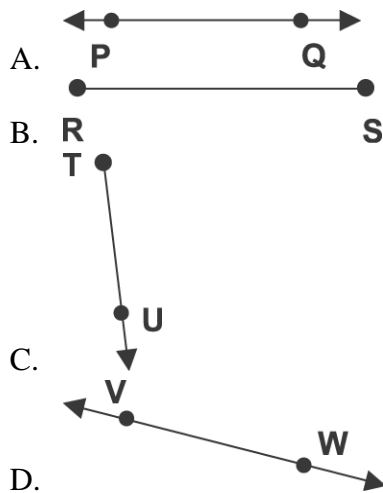
Date: _____

Teacher: Jill Tonelli

17. Which lines are parallel?



18. Which figure is a ray?



Name: _____


Test: Math-Geometry and Measu



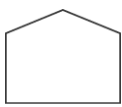

Date: _____

Teacher: Jill Tonelli

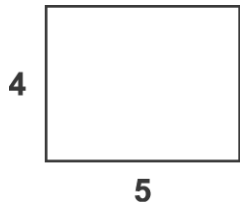
19. The height of a teacher's desk would be about

- A. 100 millimeters
 - B. 5 centimeters
 - C. 1 meter
 - D. 2 kilometers
-

20. Which shape is the same shape and size as ?

- A. 
 - B. 
 - C. 
 - D. 
-

21. What is the perimeter of this rectangle?



- A. 20
 - B. 18
 - C. 16
 - D. 9
-