

Georgia
CRCT
online



Math-All Areas Quiz 9

Fifth Grade Mathematics
Quiz

Jill Tonelli

Name: _____

Date: _____

Instructions:

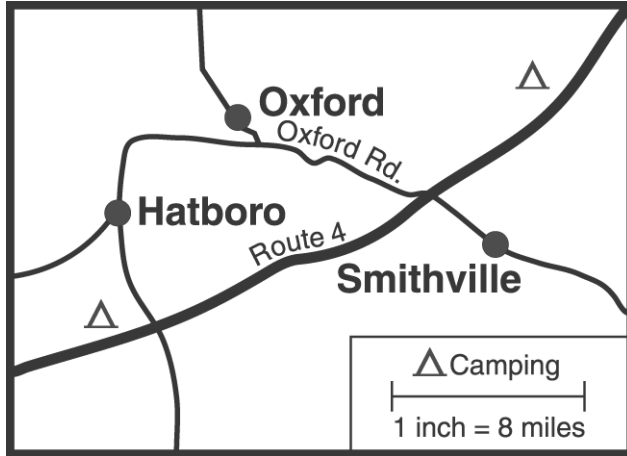
Name: _____

Quiz: Math-All Areas Quiz 9

Date: _____

Teacher: Jill Tonelli

1. Which is the best estimate of the distance from Smithville to Hatboro by the most direct route?



- A. 12 miles
 - B. 20 miles
 - C. 28 miles
 - D. 36 miles
-

2. In a class of 35 students, $\frac{3}{5}$ like pizza and $\frac{2}{7}$ like hamburgers. Which food do more students like?

Explain how you found your answer.

Name: _____

Quiz: Math-All Areas Quiz 9

Date: _____

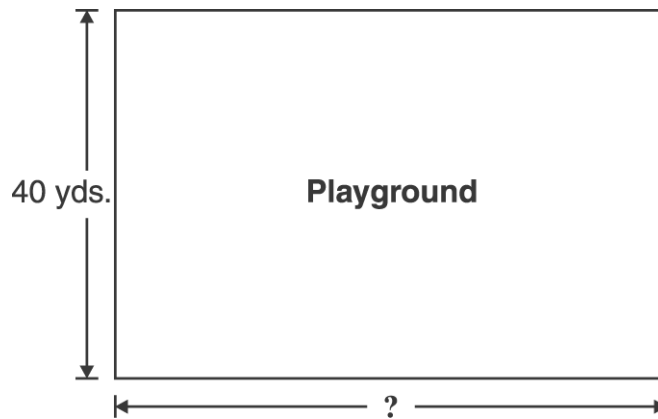
Teacher: Jill Tonelli

3. Which number would make the statement true?

$$1 + 2 + 3 = 3 + 1 + \square$$

- A. 6
 - B. 4
 - C. 3
 - D. 2
-

Use the picture below to answer question 4.



4. The area of the rectangular playground is 2400 sq. yds., and the width is 40 yds. Which is the length of the playground?

- A. 40 yds.
 - B. 60 yds.
 - C. 1160 yds.
 - D. 2360 yds.
-

Name: _____

Quiz: Math-All Areas Quiz 9

Date: _____

Teacher: Jill Tonelli

5. Which of the following is the same as 342?

A. $3000 + 400 + 2$

B. $300 + 40 + 2$

C. $30 + 4 + 2$

D. $3 + 4 + 2$

6. Bettina and Molly are playing a guessing game. Bettina wrote three numbers on a piece of paper. Then she gave Molly three clues about the numbers.

Clue 1: •All the numbers are different.

Clue 2: •They add up to 17.

Clue 3: •Each of the numbers is less than 8.

What are the three numbers?

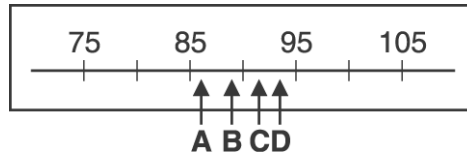
Name: _____

Quiz: Math-All Areas Quiz 9

Date: _____

Teacher: Jill Tonelli

7. Your favorite radio station is number 92 on the dial. Which arrow is closest to number 92?



- A. arrow A
 - B. arrow B
 - C. arrow C
 - D. arrow D
-