

Georgia  
**CRCT**  
online



## Social Studies All Areas Test 9

Fourth Grade Social Studies  
Test

Geoff Chandler

Name: \_\_\_\_\_

Date: \_\_\_\_\_

### **Instructions:**

Name: \_\_\_\_\_

Test: Social Studies All Areas Te

Date: \_\_\_\_\_

Teacher: Geoff Chandler

---

1. Both of these people were important in the Revolutionary War.

Answer EITHER a OR b.

This person was a political leader during the Revolutionary War and wrote the Declaration of Independence. Who was this person, and why was this document important?

This person was a military leader during the Revolutionary War and the Commander of the Continental Army. Who was this person, and why was this title important?

- 
2. The first English settlements in North America were located at Jamestown and Plymouth. Which of the following sentences describes BOTH settlements?

- A. They were in wooded areas next to rivers.
  - B. They were in mountainous areas for protection.
  - C. They were built with the help of Native Americans.
  - D. They were built along the coast.
-

Name: \_\_\_\_\_

Test: Social Studies All Areas Te

Date: \_\_\_\_\_

Teacher: Geoff Chandler

---

3. The United States government is divided into three branches—executive, legislative, and judicial. Each branch can check the other branches to keep them balanced. Which of the following is an example of a legislative check over the executive branch?

- A. The president vetoes a bill from Congress.
  - B. The Congress overrides the president’s veto.
  - C. The Congress states that a law is unconstitutional.
  - D. The Supreme Court states that a law is unconstitutional.
- 

4. The English colonists in North America needed workers, so they started forcing Africans to come to the colonies to work as

- A. school teachers.
  - B. slaves.
  - C. factory workers.
  - D. apprentices.
- 

5. A person driving a car needs to be very responsible. Which of the following BEST describes the driver’s responsibilities?

- A. The driver needs to know how to drive and the rules of driving.
  - B. The driver needs to know the rules of driving.
  - C. The driver needs to know how the car works.
  - D. The driver needs to know how to drive.
-

Name: \_\_\_\_\_

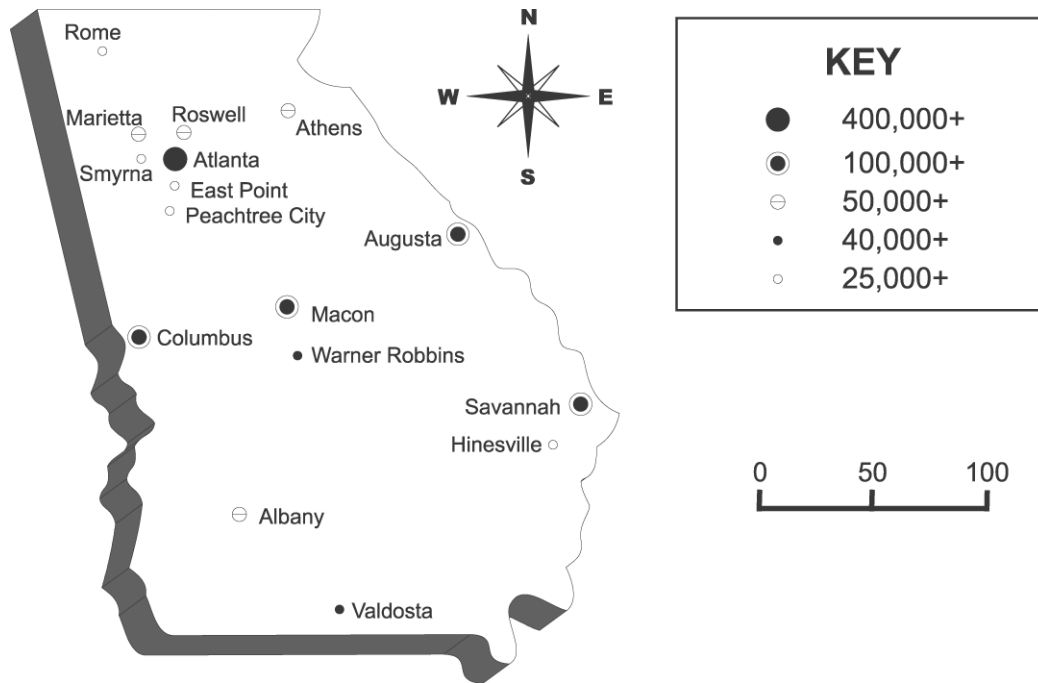
Test: Social Studies All Areas Te

Date: \_\_\_\_\_

Teacher: Geoff Chandler

---

Use the map below to answer question 6.



6. This map shows Georgia's largest cities. According to the map, which city is 150 miles southwest of Savannah?
- A. Macon
  - B. Augusta
  - C. Valdosta
  - D. Hinesville
-

Name: \_\_\_\_\_

Test: Social Studies All Areas Te

Date: \_\_\_\_\_

Teacher: Geoff Chandler

---

7. The colonies in North America that were settled by the British are divided into three areas—New England, Middle, and Southern. Which of the following BEST describes the climate of the Middle colonies?

- A. warm summers and winters with areas that are cold and snowy and areas that are mild
  - B. wet; cold summers and mild winters with little or no snow
  - C. cold summers and winters with areas that are cold and snowy and areas that are mild
  - D. wet; cold summers and cold winters with much snow
-

Name: \_\_\_\_\_

Test: Social Studies All Areas Te

Date: \_\_\_\_\_

Teacher: Geoff Chandler

Use the map below to answer question 8.



8. What is the population of San Francisco, California?

- A. 3,500,000
- B. 6,000,000
- C. 8,000,000
- D. 13,000,000

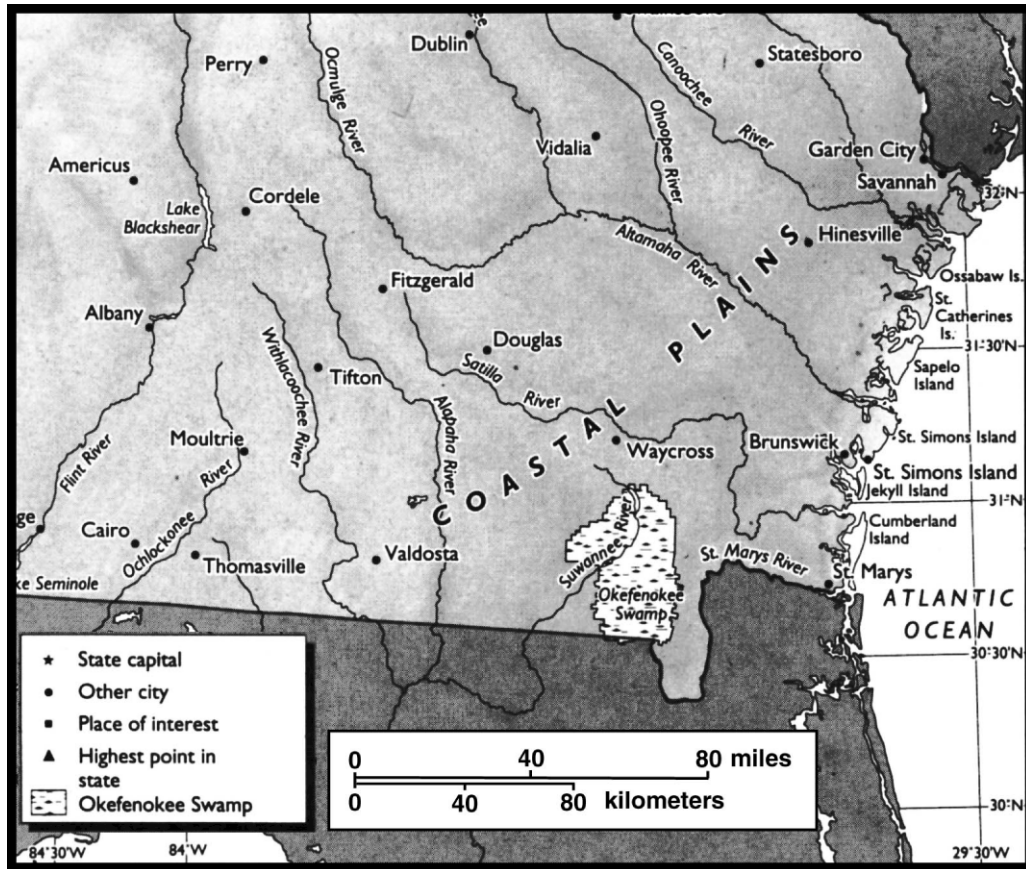
Name: \_\_\_\_\_

Test: Social Studies All Areas Te

Date: \_\_\_\_\_

Teacher: Geoff Chandler

Use the map below to answer question 9.



9. Which tourist spot is located 20 miles south of Waycross, Georgia?

- A. St. Catherines Island
- B. Hinesville
- C. St. Simons Island
- D. Okefenokee Swamp

Name: \_\_\_\_\_

Test: Social Studies All Areas Te

Date: \_\_\_\_\_

Teacher: Geoff Chandler

---

10. In 1763, Great Britain won the French and Indian War. In spite of the victory, there would be problems between Great Britain and the colonists in America.

Describe TWO reasons why Great Britain and the colonists in America were having problems.

---

11. The following are important events in the history of Georgia. What is the correct order of these events?

1. Georgia representatives sign the Declaration of Independence.

2. The King of England gives permission for James Oglethorpe to start a colony.

3. The Yamacraws settle in Georgia.

4. The settlement at Savannah is established.

A. 2, 4, 1, 3

B. 4, 1, 3, 2

C. 3, 2, 4, 1

D. 1, 3, 2, 4

---



Name: \_\_\_\_\_

Test: Social Studies All Areas Te

Date: \_\_\_\_\_

Teacher: Geoff Chandler

---

12. In 1752, Georgia became a royal colony under the control of the King of England. Which of the following changes took place?

- A. Settlers were permitted to take any lands they wanted from Native Americans.
  - B. The Church of England became the official church of Georgia.
  - C. The settlers were forced to give up their land to the colony.
  - D. Rules were created concerning the sale of land and products.
- 

13. On October 19, 1781, British troops surrendered to American and French forces in Virginia. This battle marked the end of the Revolutionary War. This battle took place at

- A. Savannah.
  - B. Guilford Courthouse.
  - C. Yorktown.
  - D. Charles Town.
- 

14. The right of people to gather for political action is protected in the Bill of Rights. Which of the following is an example of freedom of assembly?

- A. People can buy a house in a different town.
  - B. The government can decide which church people can attend.
  - C. The government can decide when people can vote.
  - D. People can meet in a town square to support a new park.
- 

15. In 1781, this document was approved by the states and made our country's first government. It was known as the

- A. Declaration of Independence.
  - B. Articles of Confederation.
  - C. Mayflower Compact.
  - D. Emancipation Proclamation.
-

Name: \_\_\_\_\_

Test: Social Studies All Areas Te

Date: \_\_\_\_\_

Teacher: Geoff Chandler

---

16. A school has rules about students leaving before the end of the school day. Which of the following is an example of a student following this rule?

- A. Terry leaves the school early and simply walks out the door.
  - B. Terry tells a friend that she is leaving the school early that day.
  - C. Terry has a doctor's appointment and signs out in the office.
  - D. Terry writes a note saying she is leaving early and gives it to a friend.
- 

17. Which of the following protects the right of Americans to publish newspapers, magazines, and books?

- A. states' rights
  - B. freedom of religion
  - C. freedom of the press
  - D. separation of powers
- 

18. People use natural and human resources. Which of the following is an example of a natural resource?

- A. machines used by the worker
  - B. oil used to heat the factory
  - C. people in the factories
  - D. skills of the worker
- 

19. Federalism is the division of powers between the different levels of government—national, state, and local. The part of government at the state level that makes the laws is the

- A. legislature.
  - B. governor.
  - C. state court.
  - D. governor's cabinet.
-

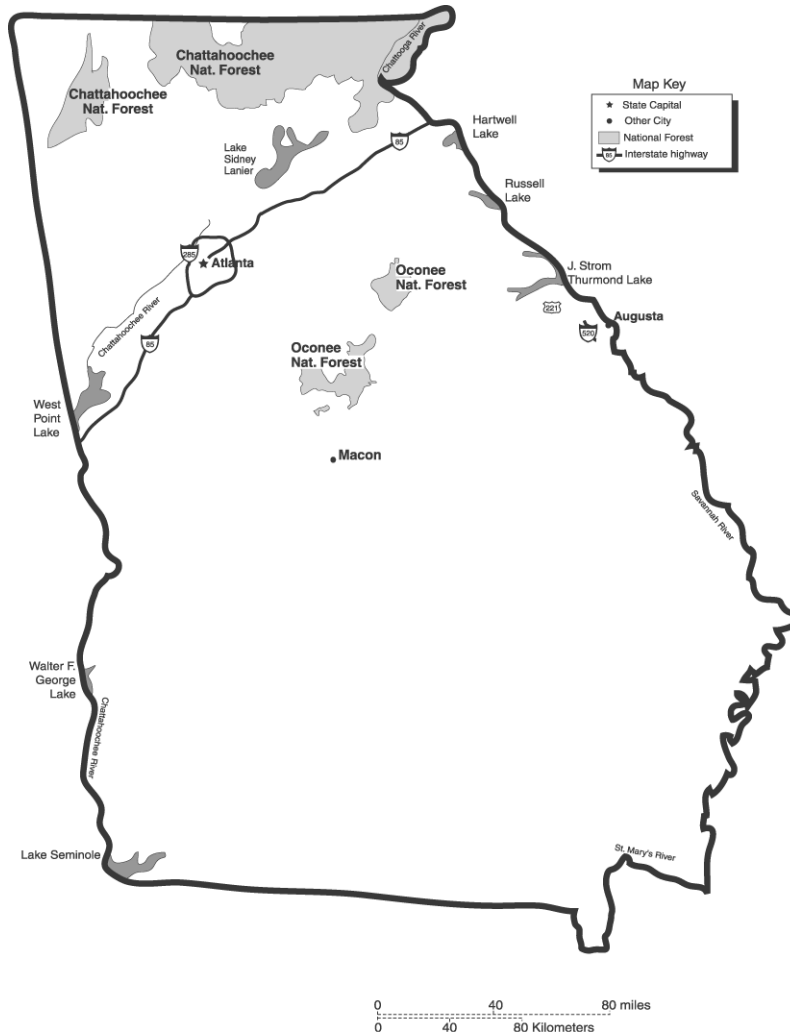
Name: \_\_\_\_\_

Test: Social Studies All Areas Te

Date: \_\_\_\_\_

Teacher: Geoff Chandler

Use the map below to answer question 20.



20. Look at the map. About how many miles are there between Lake Sidney Lanier and Macon?

- A. 40 miles
- B. 60 miles
- C. 80 miles
- D. 100 miles

Name: \_\_\_\_\_

Test: Social Studies All Areas Te

Date: \_\_\_\_\_

Teacher: Geoff Chandler

---

21. Which branch of government is the Congress of the United States?

- A. judicial
  - B. international
  - C. legislative
  - D. executive
- 

22. The Massachusetts Bay Colony was started by the Pilgrims and the Puritans. They started settlements because they wanted to worship as they pleased. Which of the following BEST describes their ideas of worship?

- A. Only people who believed as they do would be welcome.
  - B. Any person of any religious belief would be welcome.
  - C. Only white people who believed would be welcome.
  - D. Any person who had Christian beliefs would be welcome.
-