

Georgia  
**CRCT**  
online



## Geometry and Measurement Test 3

Fourth Grade Mathematics  
Test

Geoff Chandler

Name: \_\_\_\_\_

Date: \_\_\_\_\_

### **Instructions:**

Name: \_\_\_\_\_

Test: Geometry and Measurement

Date: \_\_\_\_\_

Teacher: Geoff Chandler

---

---

Name: \_\_\_\_\_

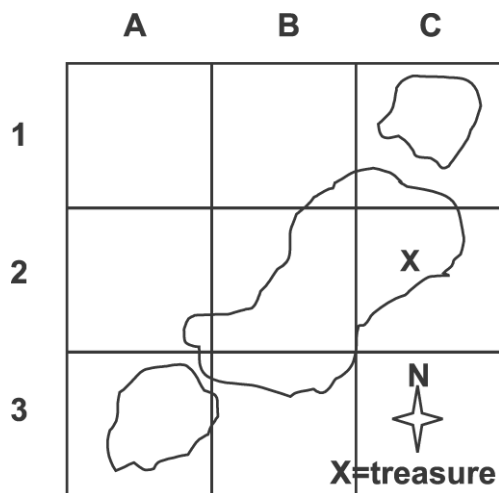
Test: Geometry and Measurement

Date: \_\_\_\_\_

Teacher: Geoff Chandler

---

1. Marco found a treasure map. What is the ordered pair for the location of the treasure?



Name: \_\_\_\_\_

Test: Geometry and Measurement

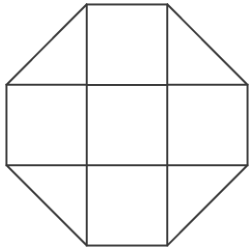
Date: \_\_\_\_\_

Teacher: Geoff Chandler

---

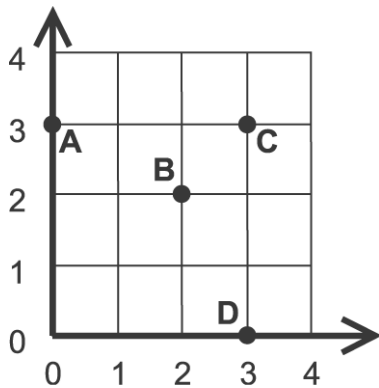
- A. (2, C)
  - B. (C, 2)
  - C. (3, C)
  - D. (C, 3)
- 

2. Each square is 1 sq cm. What is the area of the figure?



- A. 5 sq cm
  - B. 6 sq cm
  - C. 7 sq cm
  - D. 8 sq cm
- 

3. What letter names the point located by (0, 3)?



Name: \_\_\_\_\_

Test: Geometry and Measurement





Date: \_\_\_\_\_

Teacher: Geoff Chandler

---

- A. A
  - B. B
  - C. C
  - D. D
- 

4. Which shape does NOT have any parallel sides?

- A. 
- B. 
- C. 
- D. 

---

5. Joaquin saved \$20.00. He decided to buy a book at the school book fair. The book cost \$7.95. Estimate how much money he has left.

- A. \$10.00
  - B. \$12.00
  - C. \$14.00
  - D. \$16.00
-

Name: \_\_\_\_\_

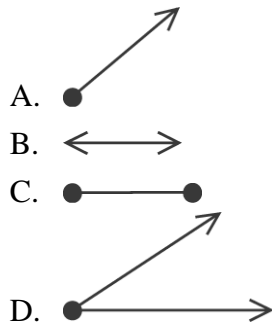
Test: Geometry and Measurement

Date: \_\_\_\_\_

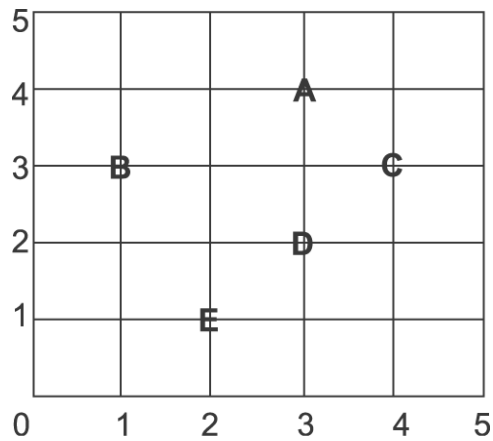
Teacher: Geoff Chandler

---

6. Which of the pictures shows a line segment?



7. Mrs. Durand's science class went on a nature walk. Heidi and Ramon made the map below to show where they saw plants and animals. They saw a birch tree at point (4, 3). Which letter marks the point (4, 3)?



- A. point A  
B. point B  
C. point C  
D. point D
-

Name: \_\_\_\_\_

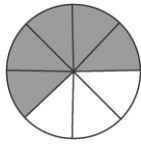
Test: Geometry and Measurement

Date: \_\_\_\_\_

Teacher: Geoff Chandler

---





8. Ivan and Kim had  $\frac{5}{8}$  of a blueberry pie. They ate  $\frac{2}{8}$  of the pie.



How much of the pie did they have left?

- A.  $\frac{2}{8}$
  - B.  $\frac{3}{8}$
  - C.  $\frac{5}{8}$
  - D.  $\frac{7}{8}$
- 

9. Which shape is symmetrical?

- A. 
  - B. 
  - C. 
  - D. 
-

Name: \_\_\_\_\_

Test: Geometry and Measurement

Date: \_\_\_\_\_



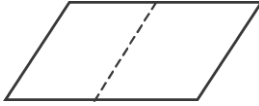

Teacher: Geoff Chandler

---

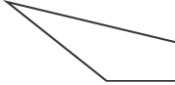
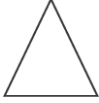


10. Which is the BEST unit of measure for how long a person sleeps at night?

- A. seconds
  - B. hours
  - C. minutes
  - D. days
- 

11. Which shape can be folded along the dotted line so that both sides will match exactly?

- A. 
  - B. 
  - C. 
  - D. 
- 

12. Which is a quadrilateral with two parallel sides?

- A. 
  - B. 
  - C. 
  - D. 
-



Name: \_\_\_\_\_

Test: Geometry and Measurement

Date: \_\_\_\_\_

Teacher: Geoff Chandler

---

13. What time is shown on this clock?



- A. 1:34
  - B. 2:40
  - C. 3:32
  - D. 7:10
- 

14. A pencil's length is about



- A. 8 inches
  - B. 8 feet
  - C. 8 yards
  - D. 8 miles
- 

15. Rashad started playing football at 2:15 P.M. and played for 1 hour and 15 minutes. At what time did Rashad stop playing football?

- A. 10:00 P.M.
  - B. 4:30 P.M.
  - C. 3:30 P.M.
  - D. 3:15 P.M.
-

Name: \_\_\_\_\_

Test: Geometry and Measurement

Date: \_\_\_\_\_

Teacher: Geoff Chandler

---

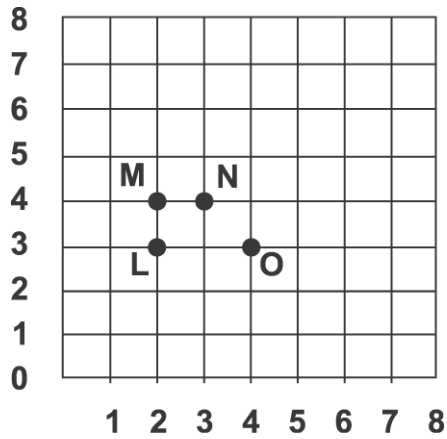
16. What unit would you use to measure a paperclip?

- A. inches
  - B. feet
  - C. yards
  - D. miles
- 

17. A pencil weighs about \_\_\_\_\_.

- A. 2 gallons
  - B. 2 ounces
  - C. 2 pints
  - D. 2 pounds
- 

18. Which point is located at (3, 4)?



- A. L
  - B. M
  - C. N
  - D. O
-

Name: \_\_\_\_\_

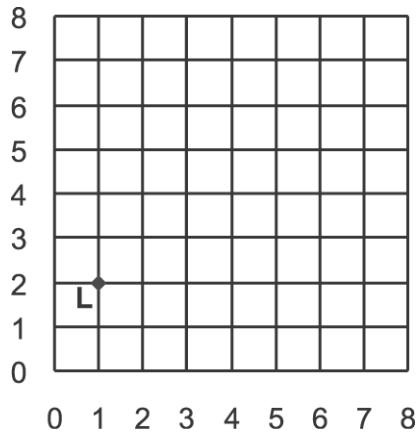
Test: Geometry and Measurement

Date: \_\_\_\_\_

Teacher: Geoff Chandler

---

19. Which is the location of point L?



- A. (1, 1)
  - B. (1, 2)
  - C. (2, 1)
  - D. (2, 2)
- 

20. Jason went to the hardware store for his father. He bought a bag of nails for \$.95, sandpaper for \$.78, masking tape for \$.25, and a paint brush for \$.99. Estimate how much Jason spent on the supplies for his father.

- A. \$2.00
  - B. \$3.00
  - C. \$4.00
  - D. \$5.00
-

Name: \_\_\_\_\_

Test: Geometry and Measurement

Date: \_\_\_\_\_

Teacher: Geoff Chandler

---

21. Lucia wanted to buy a chicken sandwich for \$1.40. She has 3 quarters, 4 dimes, and 1 nickel. How much more money does Lucia need?

---